

USN

--	--	--	--	--	--	--	--	--	--

18MR71

Seventh Semester B.E. Degree Examination, Feb./Mar. 2022 Mechanical Vibrations

Time: 3 hrs.

Max. Marks: 100

Note: Answer any FIVE full questions, choosing ONE full question from each module.

Module-1

- 1 a. Explain : i) Types of vibration ii) Beats Phenomenon (10 Marks)
 b. Add the following harmonics motions and check the solution Graphically.
 $x_1 = 3 \sin(\omega t + 30^\circ)$, $x_2 = 4 \cos(\omega t + 10^\circ)$ (10 Marks)

OR

- 2 a. Explain the following :
 i) Forced vibration
 ii) Damped vibration
 iii) Simple Harmonic Motion
 iv) Degree of Freedom. (08 Marks)
 b. Find the Fourier series for the saw tooth wave as shown in Fig Q2(b)

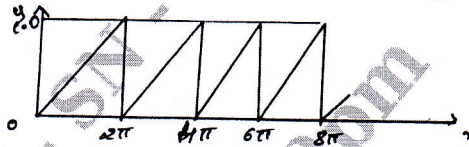


Fig Q2(b)

(12 Marks)

Module-2

- 3 a. Derive equation of motion and natural frequency of vibration of a spring mass system of by energy method. (08 Marks)
 b. Determine the natural frequency of the system shown in Fig Q3(b)-i) and Fig Q3(b)-ii)

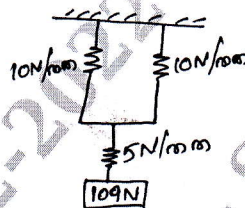


Fig Q3(b)-i)

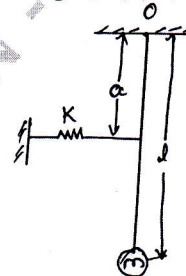


Fig Q3(b)-ii)

(12 Marks)

OR

- 4 a. Set up the differential equation for a viscous damping system and obtain the complete solution for critically damped system. (12 Marks)
 b. A spring mass damped system shown in Fig Q4(b) determine :
 i) Natural frequency
 ii) Damping factor
 iii) Frequency of Damped vibration
 iv) Logarithmic Decrement.

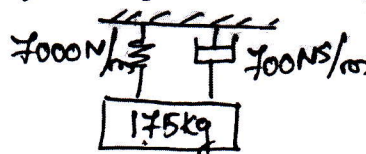


Fig Q4(b)

(08 Marks)

Important Note : 1. On completing your answers, compulsorily draw diagonal cross lines on the remaining blank pages.
 2. Any revealing of identification, appeal to evaluator and /or equations written eg, 42+8 = 50, will be treated as malpractice.

Module-3

- 5 a. What is Transmissibility? Explain its significance. (10 Marks)
 b. A Machine of Total mass 17kg is mounted on springs having stiffness $K = 11.000\text{N/cm}$. A piston within the machine has a mass of 2kg has a reciprocating motion with stroke 7.5cm and speed 6000rpm. Assuming the motion to be SHM. Determine : i) Amplitude of Machine ii) Transmissibility iii) Force-transmitted to the Ground. Take $\xi = 0.2$ (10 Marks)

OR

- 6 a. Explain with neat sketch i) Vibrometer ii) Frahm Tachometer. (10 Marks)
 b. A rotor of mass 12kg is mounted midway on a 25mm diameter horizontal shaft supported at the ends of two bearing. The spas between the bearings is 900mm. Because of some manufacturing defect. The C_g of the rotor is 0.02mm away from geometric centre of rotor. If the system rotates at 3000rpm, determine the amplified of steady state vibrations and dynamic force on the bearing. Take $E = 200\text{GPa}$. (10 Marks)

Module-4

- 7 a. A shaft 180mm diameter is supported in two bearing 2.5m apart. It carries 3 discs of weight 2500N, 5000N and 2000N at 0.6m, 1.5m and 2m from the left end. Assume the shaft weight to be 1900N/m length. Determine the natural frequency of transverse vibration by Dunkerley's method. (10 Marks)
 b. Find the lowest natural frequency of vibration for the system shown in Fig Q7(b) by Rayleigh's method. $E = 1.96 \times 10^{11}\text{N/m}^2$, $I = 4 \times 10^{-7}\text{m}^4$.

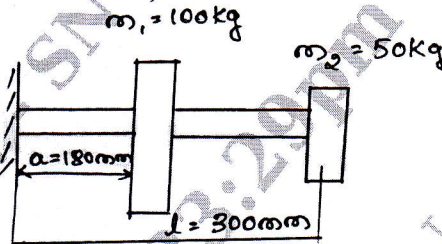


Fig Q7(b)

(10 Marks)

OR

- 8 Using Stodola's method, determine the lowest natural frequency of the torsional system shown in Fig Q8.

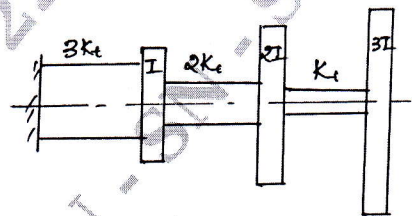


Fig Q8

(20 Marks)

Module-5

- 9 a. Write a short note on Dynamic testing machines and structures. (10 Marks)
 b. Explain the following: i) Microphones ii) Sound level meters. (10 Marks)

OR

- 10 a. Sketch and explain the arrangement for experimental model analysis. (10 Marks)
 b. Explain the various techniques for machine condition monitoring. (10 Marks)
